






Write an addition sentence based on the blocks.
Then write a related subtraction sentence.


1.  $\underline{4} + \underline{2} = \underline{6}$
 $\underline{6} - \underline{4} = \img alt="2 green blocks" data-bbox="395 255 465 285"/>$

2.  $\underline{\quad} + \underline{\quad} = \underline{\quad}$
 $\underline{\quad} - \underline{\quad} = \img alt="4 green blocks" data-bbox="395 385 535 415"/>$

3.  $\underline{\quad} + \underline{\quad} = \underline{\quad}$
 $\underline{\quad} - \underline{\quad} = \img alt="6 green blocks" data-bbox="395 515 605 545"/>$

4.  $\underline{\quad} + \underline{\quad} = \underline{\quad}$
 $\underline{\quad} - \underline{\quad} = \img alt="3 green blocks" data-bbox="395 645 505 675"/>$

5.  $\underline{\quad} + \underline{\quad} = \underline{\quad}$
 $\underline{\quad} - \underline{\quad} = \img alt="5 green blocks" data-bbox="395 775 575 805"/>$

6.  $\underline{\quad} + \underline{\quad} = \underline{\quad}$
 $\underline{\quad} - \underline{\quad} = \img alt="4 green blocks" data-bbox="395 905 535 935"/>$